

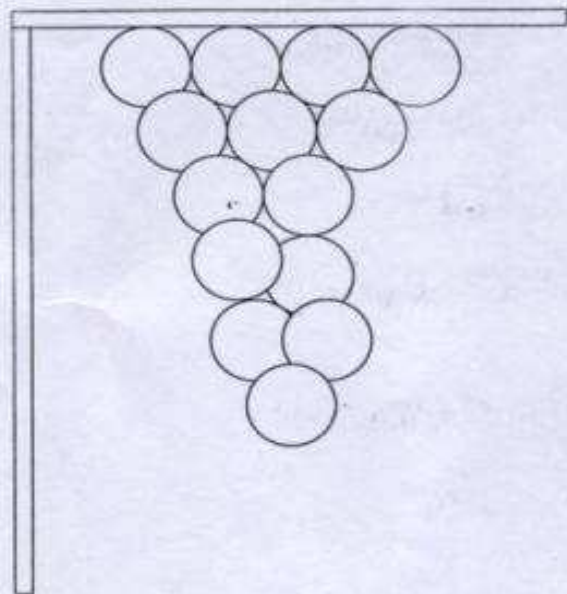
Sulla vite puoi vedere  
un bel grappolone di  
uva schiava.

Numera ciascun acino.

Gli acini contati sono \_\_\_\_\_;

una \_\_\_\_\_

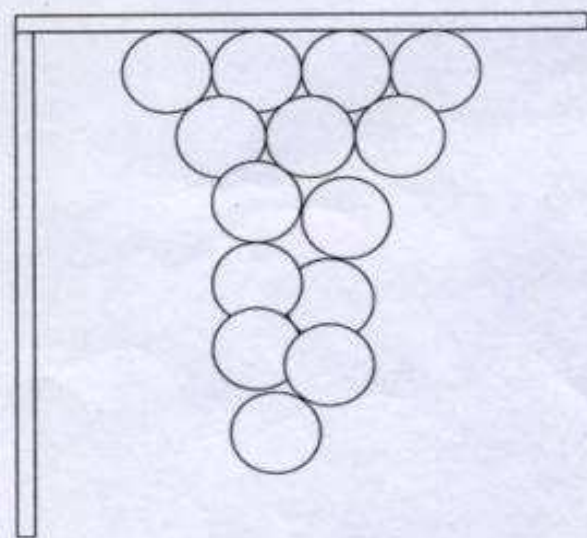
+ \_\_\_\_\_ unità.



Arriva un uccellino e si mangia  
8 acini.

Illustra tu la situazione →

Ora sul grappolo, secondo te,  
ci sono  acini o   
acini di prima?



Prova a fare l'operazione \_\_\_\_\_ ○ \_\_\_\_\_ = \_\_\_\_\_

Numera ciascun acino

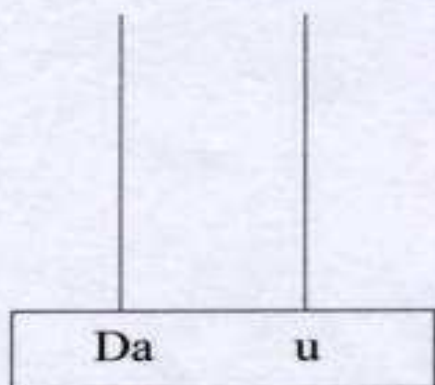


Gli acini sono in tutto .....


Cioè una .....

più ..... unità

Sistema gli acini sull'abaco



Ora mangia 9 acini



Gli acini non sono più .....

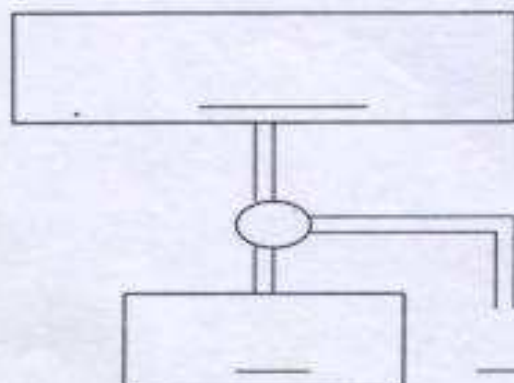
ma sono .....

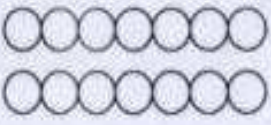

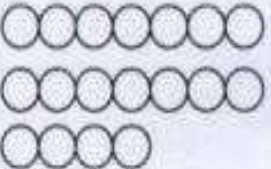

Perché hai fatto :

=

-----

prova con la macchina delle sottrazioni



<p>NUMERA GLI ACINI</p> 	<p>DECINE      UNITA'</p> <p>_____      _____</p>	<div style="display: flex; justify-content: space-around; align-items: center;"> <div style="border-left: 1px solid black; border-right: 1px solid black; height: 100px; width: 30px;"></div> <div style="border-left: 1px solid black; border-right: 1px solid black; height: 100px; width: 30px;"></div> </div> <div style="display: flex; justify-content: space-around; border: 1px solid black; padding: 2px; margin-top: 5px;"> <span>DA</span> <span>u</span> </div>	<p>SCRIVI L'OPERAZIONE</p> <p>____ da + ____ u</p> <p>____ + ____ = ____</p>
<p>NUMERA GLI ACINI</p> 	<p>DECINE      UNITA'</p> <p>_____      _____</p>	<div style="display: flex; justify-content: space-around; align-items: center;"> <div style="border-left: 1px solid black; border-right: 1px solid black; height: 100px; width: 30px;"></div> <div style="border-left: 1px solid black; border-right: 1px solid black; height: 100px; width: 30px;"></div> </div> <div style="display: flex; justify-content: space-around; border: 1px solid black; padding: 2px; margin-top: 5px;"> <span>DA</span> <span>u</span> </div>	<p>SCRIVI L'OPERAZIONE</p> <p>____ da + ____ u</p> <p>____ + ____ = ____</p>
<p>NUMERA GLI ACINI</p> 	<p>DECINE      UNITA'</p> <p>_____      _____</p>	<div style="display: flex; justify-content: space-around; align-items: center;"> <div style="border-left: 1px solid black; border-right: 1px solid black; height: 100px; width: 30px;"></div> <div style="border-left: 1px solid black; border-right: 1px solid black; height: 100px; width: 30px;"></div> </div> <div style="display: flex; justify-content: space-around; border: 1px solid black; padding: 2px; margin-top: 5px;"> <span>DA</span> <span>u</span> </div>	<p>SCRIVI L'OPERAZIONE</p> <p>____ da + ____ u</p> <p>____ + ____ = ____</p>
<p>NUMERA GLI ACINI</p> 	<p>DECINE      UNITA'</p> <p>_____      _____</p>	<div style="display: flex; justify-content: space-around; align-items: center;"> <div style="border-left: 1px solid black; border-right: 1px solid black; height: 100px; width: 30px;"></div> <div style="border-left: 1px solid black; border-right: 1px solid black; height: 100px; width: 30px;"></div> </div> <div style="display: flex; justify-content: space-around; border: 1px solid black; padding: 2px; margin-top: 5px;"> <span>DA</span> <span>u</span> </div>	<p>SCRIVI L'OPERAZIONE</p> <p>____ da + ____ u</p> <p>____ + ____ = ____</p>